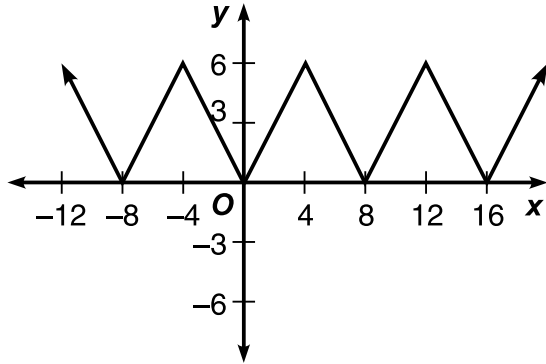


10.1 HW: Sine and Cosine Graphs

State whether each function is periodic. If it is, state the period and amplitude.

1.

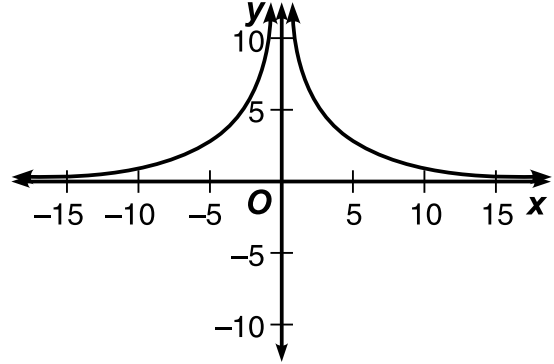


Periodic: Yes/No

Period: 8

Amplitude: 3

2.

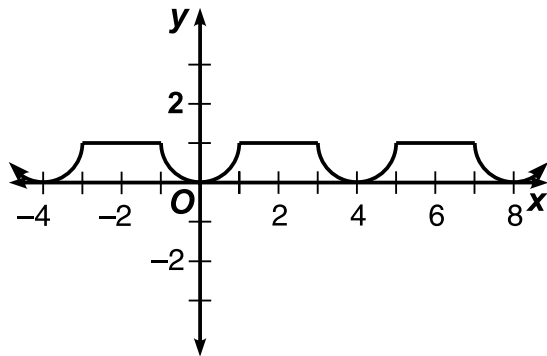


Periodic: Yes/No

Period: _____

Amplitude: _____

3.

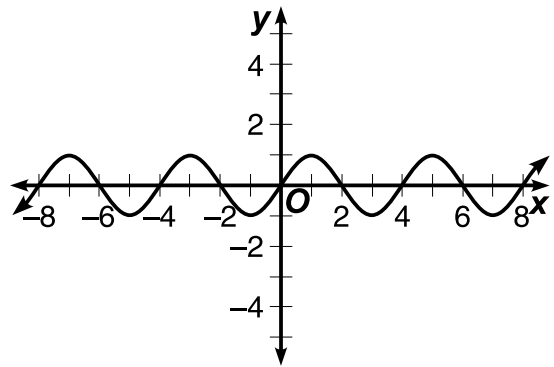


Periodic: Yes/No

Period: 4

Amplitude: 0.5

4.



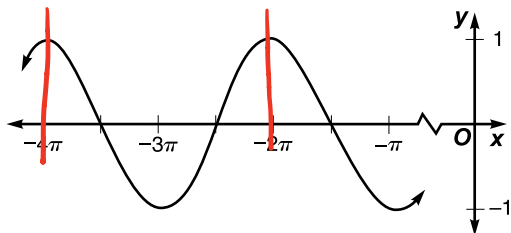
Periodic: Yes/No

Period: 4

Amplitude: 1

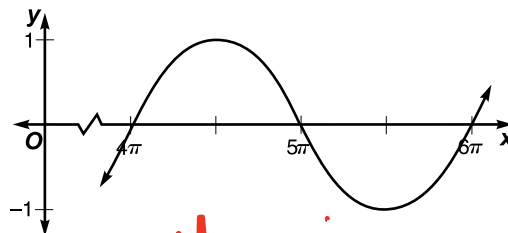
Determine whether each graph is $y = \sin \theta$, $y = \cos \theta$, or neither.

5.



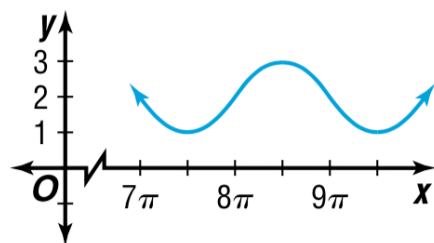
$$y = \cos x$$

6.



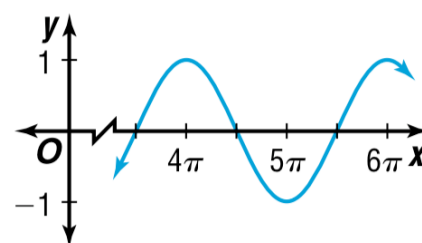
$$y = \sin x$$

7.



Neither

8.



$$y = \cos x$$